

Name: \_\_\_\_\_

CHAPTER  
**14**

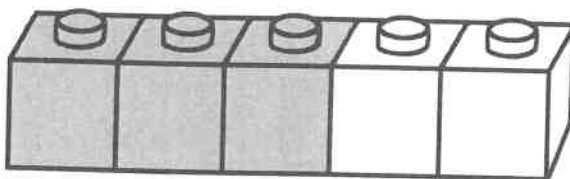
# Number Facts

## Lesson 1 Number Facts to 10

Count and write.

COMPLETE  
DURING THE  
WEEKS OF  
APRIL 27 -  
MAY 8

1

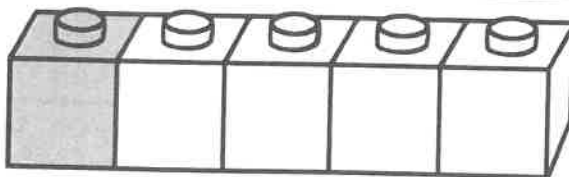


There are \_\_\_\_\_ 

There are \_\_\_\_\_ 

5 is \_\_\_\_\_ and \_\_\_\_\_.

2



There is \_\_\_\_\_ 

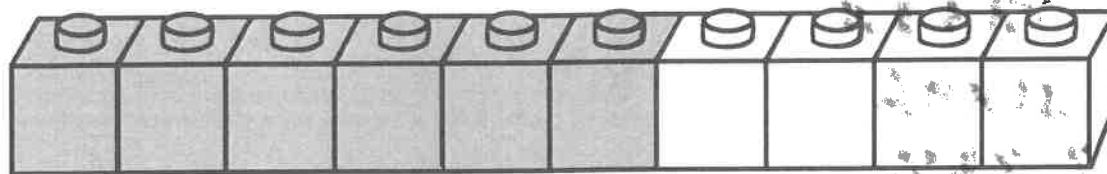
There are \_\_\_\_\_ 

5 is \_\_\_\_\_ and \_\_\_\_\_.

Name: \_\_\_\_\_

Count and write.

1

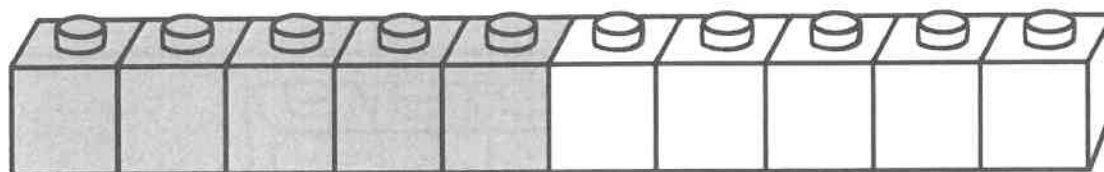


There are \_\_\_\_\_ .

There are \_\_\_\_\_ .

10 is \_\_\_\_\_ and \_\_\_\_\_.

2



There are \_\_\_\_\_ .

There are \_\_\_\_\_ .

10 is \_\_\_\_\_ and \_\_\_\_\_.

Name: \_\_\_\_\_

## Count and write.

1 10 is \_\_\_\_\_ and 7.

2 4 and 5 are \_\_\_\_\_.

3 7 is 2 and \_\_\_\_\_.

4 \_\_\_\_\_ and 6 are 9.

5 \_\_\_\_\_ and 2 are 5.

6 8 is \_\_\_\_\_ and 0.

7 6 and \_\_\_\_\_ are 7.

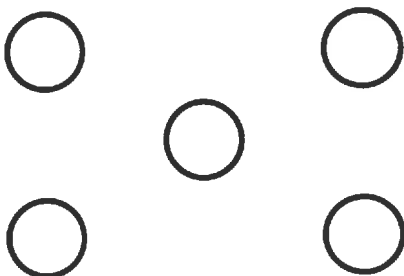
Name: \_\_\_\_\_

Count and draw more ○.


1



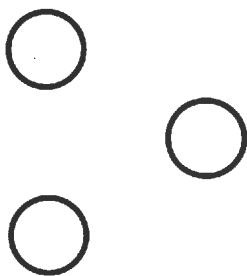
7

	
--	--

2



9

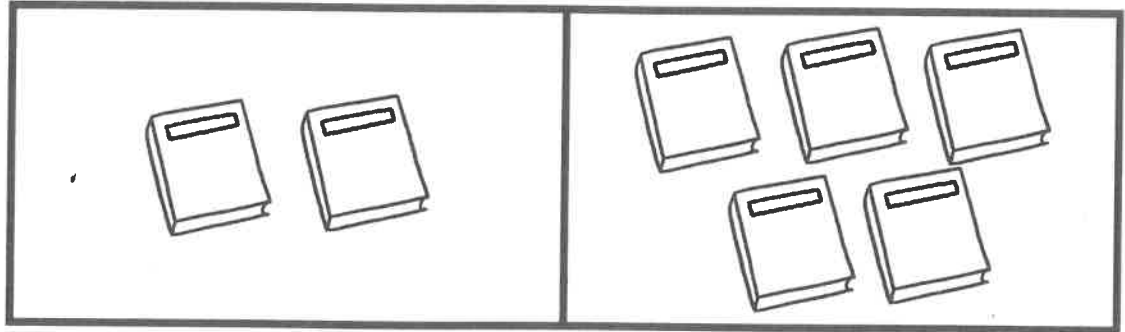
	
---	--

Name: \_\_\_\_\_

## Lesson 2 Combining Sets

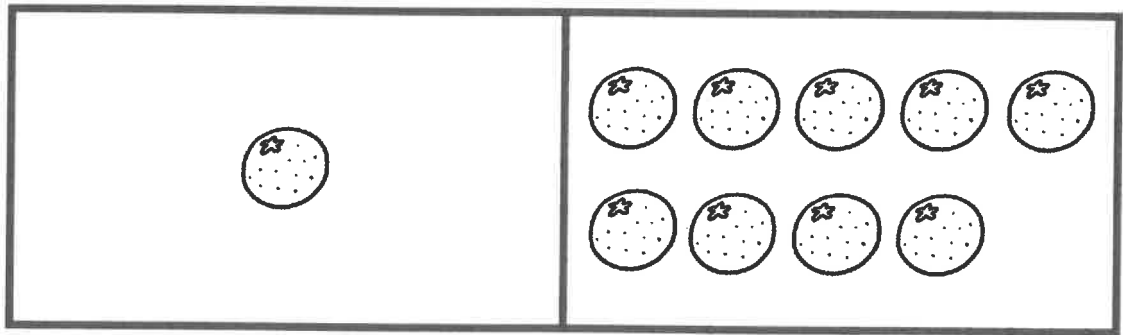
Count and write.

1



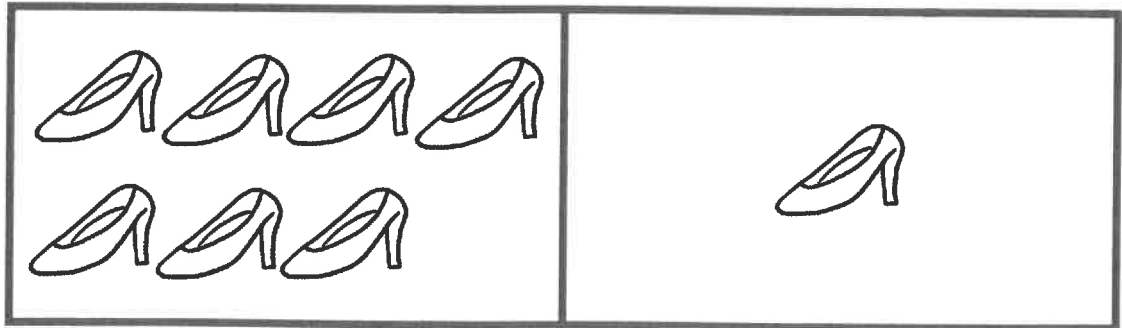
Count how many. \_\_\_\_\_

2



Count how many. \_\_\_\_\_

3

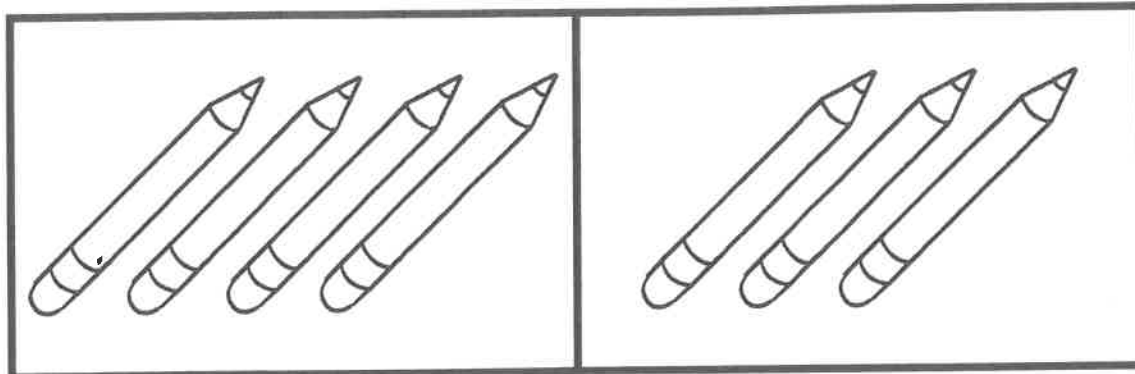


Count how many. \_\_\_\_\_

Name: \_\_\_\_\_

**Count and write.**

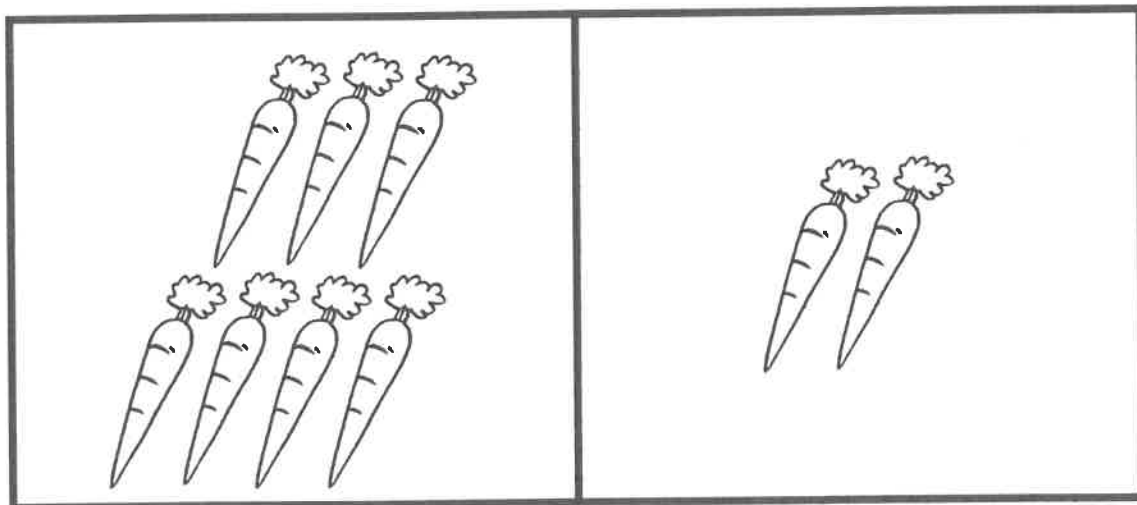
1



Count how many. \_\_\_\_\_

How many more to make 10? \_\_\_\_\_

2



Count how many. \_\_\_\_\_

How many more to make 10? \_\_\_\_\_

Name: \_\_\_\_\_

### Lesson 3 Composing and Decomposing Numbers to 20

Draw ○. Write the number sentence.


1



--	--	--	--	--	--	--	--	--	--

\_\_\_\_\_ is \_\_\_\_\_ and \_\_\_\_\_ .

2




\_\_\_\_\_ is \_\_\_\_\_ and \_\_\_\_\_ .

Name: \_\_\_\_\_

Count and write. Write the number sentence.

1

●	●	●	●	●	●	●	●	●	
---	---	---	---	---	---	---	---	---	--

\_\_\_\_\_ and \_\_\_\_\_ make \_\_\_\_\_.

---

2

●	●	●	●						
---	---	---	---	--	--	--	--	--	--

\_\_\_\_\_ and \_\_\_\_\_ make \_\_\_\_\_.

---

3

●	●	●	●	●	●	●			
●	●	●	●	●					


\_\_\_\_\_ and \_\_\_\_\_ make \_\_\_\_\_.



Name: \_\_\_\_\_

## Lesson 4 Counting On

Count and write.




Count how many.

\_\_\_\_\_

How many more to make 15?

\_\_\_\_\_



Count how many.

\_\_\_\_\_


How many more to make 15?

\_\_\_\_\_

Name: \_\_\_\_\_

**Count and write.**


1



Count how many. \_\_\_\_\_

How many more to make 15? \_\_\_\_\_

2



Count how many. \_\_\_\_\_

How many more to make 15? \_\_\_\_\_